

Examiners' Report
January 2012

GCE Chemistry 6CH04 01

Edexcel and BTEC Qualifications

Edexcel and BTEC qualifications come from Pearson, the world's leading learning company. We provide a wide range of qualifications including academic, vocational, occupational and specific programmes for employers. For further information, please call our GCE line on 0844 576 0025, our GCSE team on 0844 576 0027, or visit our qualifications website at www.edexcel.com. For information about our BTEC qualifications, please call 0844 576 0026, or visit our website at www.btec.co.uk.

If you have any subject specific questions about this specification that require the help of a subject specialist, you may find our Ask The Expert email service helpful.

Ask The Expert can be accessed online at the following link:

<http://www.edexcel.com/Aboutus/contact-us/>

Alternatively, you can speak directly to the subject team at Pearson about Edexcel qualifications. Their contact details can be found on this link:

www.edexcel.com/teachingservices



Get more from your exam results

...and now your mock results too!

ResultsPlus is Edexcel's free online service giving instant and detailed analysis of your students' exam and mock performance, helping you to help them more effectively.

- See your students' scores for every exam question
- Spot topics, skills and types of question where they need to improve their learning
- Understand how your students' performance compares with Edexcel national averages
- Track progress against target grades and focus revision more effectively with NEW Mock Analysis

For more information on ResultsPlus, or to log in, visit www.edexcel.com/resultsplus. To set up your ResultsPlus account, call 0844 576 0024

Pearson: helping people progress, everywhere

Our aim is to help everyone progress in their lives through education. We believe in every kind of learning, for all kinds of people, wherever they are in the world. We've been involved in education for over 150 years, and by working across 70 countries, in 100 languages, we have built an international reputation for raising achievement through innovation in education. Find out more about how we can help you and your students at: www.pearson.com/uk .

January 2012

Publications Code UA030264

All the material in this publication is copyright
© Pearson Education Ltd 2012

Introduction

The paper was accessible to candidates of all abilities and there was no evidence that a shortage of time resulted in some candidates being unable to complete the paper. Any blank spaces that were evident on the paper appeared to be due to candidates not being able to answer those particular question parts. The use of significant figures seemed to be improved from the summer 2011 entry, as was the use of the data booklet, but it is important to continue to stress to candidates the need to note the clear instructions in the question. This is particularly so when a sign is requested, as otherwise marks are lost when they really should not be. There was evidence that the topic entropy was well understood but it was clear that candidates need further support to fully grasp the concepts behind nmr spectroscopy. A logical step-wise approach to answering questions is also to be recommended so that full marks can be awarded. This was clearly required in question 23b on the colour changes of the indicator in the bubble bath.

Centres are also reminded to use the most up-to-date published material from Edexcel.

The standard of graph drawing was often not to an acceptable standard, especially with regard to the choice of an appropriate scale. Likewise the reasoning behind the greater reactivity of acyl chlorides tended to be insufficient.

Question 17 (a)

The vast majority of candidates knew that a yellow or orange precipitate would be seen. The most common error was the omission of 'precipitate'. A number of candidates gave unnecessary explanations of the chemistry involved which would have used up precious time.

SECTION B

Answer ALL the questions. Write your answers in the spaces provided.

17 Two organic compounds, ^{Ket}X and Y, both with the molecular formula C_4H_8O , contain a carbonyl group. _{AlD.}

(a) Describe what you would see when 2,4-dinitrophenylhydrazine is added to either of these compounds. (1)

yellow/(orange) precipitate forms (ppt)



ResultsPlus
Examiner Comments

This candidate has suggested two colours for the possible precipitate observed. Either of which would have been acceptable.

Question 17 (b)

A very large proportion of candidates correctly understood how to distinguish between aldehydes and ketones with a simple chemical test. Tollens' reagent or Benedict's/Fehling's solution were popular choices but at times acidified dichromate was given. Occasionally two different tests were given for X and Y but the question clearly requests 'a chemical test'.

(b) It is suspected that X is a ketone and Y is an aldehyde. Outline a chemical test you could carry out to confirm this, describing the results in each case.

(3)

A chemical test to test out if either of them is a ketone or aldehyde can be done with Fehling's solution. Fehling's solution is blue in colour. You then add both X and Y to the Fehling's solution. The one that turns the solution red is an aldehyde and the one that stays the same colour is a ketone.



ResultsPlus Examiner Comments

In order to score the mark for the test on the aldehyde with Benedict's or Fehling's solution, the colour change and the state were **both** required.



ResultsPlus Examiner Tip

If the result of a chemical test is negative then do remember to clearly state, as this candidate has, that the colour stays the same or that there is no change.

Question 17 (c)

In 17c(i) most candidates were able to give structural formulae for the two aldehyde isomers. A sizeable number of responses had the aldehyde group incorrectly given as -COH and a very small number of candidates had the odd missing hydrogen from the chain.

In 17c(ii) a higher than expected proportion of candidates wrote crystallization or just filtration, neither of which were acceptable. The question clearly stated that the product had already been obtained but needed to be purified.

17c(iii) was very well answered with the most common error being to suggest that boiling temperature was the means to identify the hydrazone product.

Please note the answer to part (iii).

(c) (i) Give the structural formulae of the two possible isomers of Y which are aldehydes.	(1)
$\text{CH}_3\text{CH}(\text{CH}_3)\text{CHO}$	
$\text{CH}_3\text{CH}_2\text{CH}_2\text{CHO}$	
(ii) Name the technique you would use to purify the product of the test with 2,4-dinitrophenylhydrazine.	(1)
recrystallisation	
(iii) Other than by spectroscopic techniques, how would you use the purified product to identify compound Y? [Practical details are not required.]	(2)
recrystallisation and then determine melting point and compare with possible derivatives	

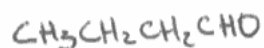


ResultsPlus

Examiner Comments

Parts (i) and (ii) are fine but in part (iii) the comparison to "possible derivatives" was felt to be too vague. How would this be done? The expected answer was comparison to a database of known values.

- (c) (i) Give the structural formulae of the two possible isomers of Y which are aldehydes.



(1)

- (ii) Name the technique you would use to purify the product of the test with 2,4-dinitrophenylhydrazine.

(1)

Purification by filtering of the product and mixing it with ethanol in a warm beaker of water.

- (iii) Other than by spectroscopic techniques, how would you use the purified product to identify compound Y? [Practical details are not required.]

(2)

Find the melting point of the purified sample and compare the temperature to a set list of temperatures to find the compound.



ResultsPlus
Examiner Comments

Please note the answer to part (iii).



ResultsPlus
Examiner Tip

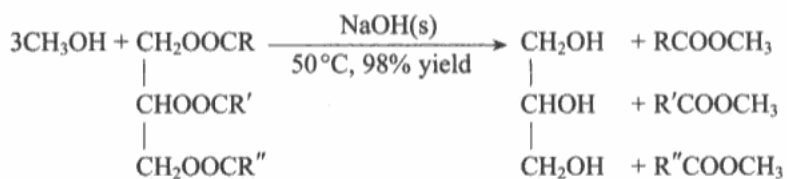
Candidates should always double-check their structures in case they have made a simple mistake.

In this example of c(i) this response has an additional carbon in the branched aldehyde on the right. If the atoms had been counted up for both isomers then the obvious mistake would most likely have been spotted.

Question 18 (a)

This question seemed difficult for most candidates with few scoring all 4 marks so would be a worthwhile practice exercise for teachers with their students. At times the hazard was not clearly identified but the precaution was appropriate and so the mark was awarded. A worryingly high number of candidates thought that the reaction temperature of 50°C was high! The toxicity of methanol was not well known and there were a large number of candidates who gave insufficient information, such as NaOH would affect the skin but without giving the necessary detail of its corrosive nature.

18 Kits for manufacturing biodiesel from vegetable oils and methanol are sold for home use. The reaction which takes place may be represented by the following equation.



*(a) Describe any two of the main hazards when carrying out this reaction. What precaution would you take to minimise the risk in each case?

(4)

Hazard *methanol is flammable*

Precaution *Have an appropriate fire retardant nearby.*

Hazard *The reaction is at a high temperature*

Precaution *Have a cooling system nearby if the reaction goes wrong.*



ResultsPlus
Examiner Comments

The flammability of the methanol is fine but the precaution is not. An electrical heat source or the avoiding of naked flames were the appropriate answers.

Question 18 (b)

Most candidates understood that biodiesel reduced the use of non-renewable fossil fuels. A small proportion of responses described the offsetting of CO₂ emissions by the growing plants taking in CO₂. However, there were a sizeable number of candidates who felt that no CO₂ was given off by the combustion of biodiesel or gave vague comments about biodegradability or pollution.

It was disappointing that there were very few responses referring to the reuse or recycling of the waste vegetable oil which is a key point.

(b) Suggest two environmental benefits of using these kits, despite the associated risks.

(2)

Fuel created is renewable & close to carbon neutral. & does not require the use of fossil fuels which are non-renewable.



ResultsPlus
Examiner Comments

Although the resources to produce the fuel are renewable it was acceptable for the fuel to be described as renewable as in the answer here.



ResultsPlus
Examiner Tip

Note that two statements are given but they are the same marking point and so only score 1 mark.

Question 19 (a) (iii)

This was a question which discriminated between the ability of the candidates and the more able often score well. However, the structure of nitriles was not well known and oftentimes amides, amines and hydroxynitriles/cyanohydrins were given. Credit was given to those who realised that hydrolysis required both water and acid or who could give a correctly balanced equation from the amide.

(iii) Propanoic acid can be made by the hydrolysis of a nitrile. Give the structural formula of the nitrile and write an equation for this reaction. (3)

Structural formula $\text{CH}_3\text{CH}_2\text{CH}_2\text{CN}$

Equation

~~$\text{CH}_3\text{CH}_2\text{COOH} + \text{H}_2\text{O} \rightarrow \text{CH}_3\text{CH}_2\text{COOH} + \text{H}_2\text{O}$~~

$\text{CH}_3\text{CH}_2\text{CH}_2\text{CN} + 2\text{H}_2\text{O} \longrightarrow \text{CH}_3\text{CH}_2\text{C}(=\text{O})\text{OH} + \text{HCN} + 2\text{H}_2$

2



ResultsPlus Examiner Comments

The use of an incorrect nitrile would have lost the first mark but the remaining marks could have been awarded if the equation had been correct. However, in this example the products are clearly wrong and although the equation does balance for atoms it does not score.



ResultsPlus Examiner Tip

A reminder once again to check the number of carbons in the chemical stated. The nitrile group does have a carbon and it does count!

Question 19 (b)

Most candidates knew that propanoyl chloride would react faster and scored the reagent mark. However, only the more able could correctly give suitable reasons **why** the acyl chloride reacts faster. The weaker nature of the C-Cl bond was the most common correct reason given. Confusion between rate of reaction and equilibrium was common.

* (b) Propanoic acid reacts with methanol, CH₃OH, to form the ester, methyl propanoate.



Even with the use of a catalyst, this reaction is quite slow and incomplete. Suggest a reagent, to replace the propanoic acid, which would form the ester at a faster rate. Suggest **two** reasons why your chosen reagent reacts faster.

(3)

Propanoic acid could be replaced by the acyl chloride propanoyl chloride. This is because propanoyl chloride is more reactive than propanoic acid group due to the presence an an electron withdrawing Cl ~~of~~ group. Also no heating is ~~as~~ required for the ~~as~~ reaction to take place which means ~~no~~ temperature need not be maintained at a certain level allowing the reaction to proceed faster.



ResultsPlus
Examiner Comments

The question requests reasons for the faster reaction with the proposed reagent. Note the examiner tip on this response.



ResultsPlus
Examiner Tip

In this response the lack of heating is unlikely to result in a faster reaction. The simple statement that the Cl is an electron-withdrawing group is insufficient to be given credit as more explanation is required.

Question 19 (c) (i)

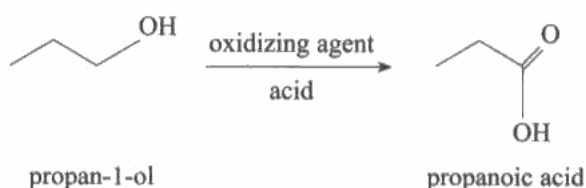
The vast majority of candidates correctly knew that "radio waves" was the correct type of radiation for nmr.

Question 19 (a) (i-ii)

Excellent knowledge of oxidising agents was shown. However, this was occasionally spoilt by the use of the wrong oxidation number. Candidates should be reminded not to add information which might negate their otherwise correct response.

In part (ii) the use of reflux was extremely common but the use of excess oxidising agent was less so and could be accompanied with excess alcohol which obviously undermined the correct point.

19 The carboxylic acid, propanoic acid, can be prepared by oxidation of the alcohol, propan-1-ol.



(a) (i) Identify a suitable oxidizing agent you could use in this reaction.

(1)

~~potassium~~ $K_2Cr_2O_7$

(ii) If you carried out this preparation in the laboratory, describe **two** measures you would take to ensure the maximum possible yield of propanoic acid is obtained.

(2)

- make sure that an excess $K_2Cr_2O_7$ is used, so all of the propan-1-ol reacts with it.
- Also use an acid catalyst which is in excess to lower the activation energy.



ResultsPlus
Examiner Comments

Read the answer that the student gives to part (ii) and then note the examiner tip.



ResultsPlus
Examiner Tip

Part (ii) requests **two** measures that need to be taken to maximize yield. These need to be different. In this response the second statement really refers to the first statement as the acid catalyst would have no affect without the oxidising agent. Make sure that two **different** suggestions are made.

Question 19 (c) (ii)

The responses seen to this question demonstrated that many candidates do not understand the concepts behind nmr. There was confusion between how infrared affects bonds and how nmr affects the spin state of the nucleus. There were also a considerable number who referred to electrons and their excitation. Only the more able candidates were confidently able to express the ideas correctly and to score both marks.

(ii) Describe what happens to ^1H nuclei when they absorb this radiation.

(2)

when the ^1H nuclei absorb this radiation they start to spin and this spin interacts with other ^1H nuclei nearby.



ResultsPlus

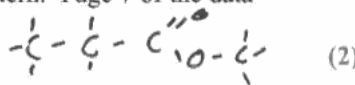
Examiner Comments

This response illustrates the misunderstanding that some candidates seem to have because the nuclei do not start to spin but they always have this state. Hence this response did not score.

Question 19 (c) (iii)

This was a high scoring question, with the spin-splitting patterns being well known and the data booklet being used effectively.

- (iii) Complete the table to show values for the chemical shift of the different ^1H nuclei in methyl propanoate and their splitting pattern. Page 7 of the data booklet gives information about chemical shifts.



^1H environment	Chemical shift, δ / ppm	Splitting pattern
$\text{CH}_3\text{O-}$	3.7	Singlet
$\text{-CH}_2\text{-}$	2.3	Quadruplet.
-CH_3	1	Triplet



ResultsPlus
Examiner Comments

Alternative spellings of quartet were given credit.



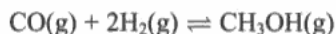
ResultsPlus
Examiner Tip

Although this response did score both marks candidates should be reminded to use the same number of significant figures as are used elsewhere in the table.

Question 20 (a)

Most candidates could correctly refer to the shift in the equilibrium to the right due to the molar ratios. However the comments on the disadvantages of increased pressure were generally insufficient. For example, the reason for the increase in cost was required for the second mark.

20 The exothermic reaction between carbon monoxide and hydrogen can be used industrially to make methanol. The process is carried out at 250 °C and between 50 and 100 atm.



(a) Explain why increasing the pressure increases the yield of methanol. Give one disadvantage of increasing the pressure.

Higher Increasing ^{the} pressure shifts the equilibrium (2)
to the side with fewer moles of gas which is the
product side ~~is~~ so more products are formed. Higher
yield. Increasing the pressure has a higher cost.



ResultsPlus
Examiner Comments

A simple reference to cost is unlikely to be given credit at A2 level.

Question 20 (b)

Parts (i) and (ii) were well answered by most candidates, demonstrating an excellent understanding of how temperature affects the entropy change of the surroundings.

Question 20 (c)

Candidates were largely able to explain how to maximise atom economy by the removal of the product but fewer responses correctly referred to the recycling of unreacted reactants. Instead addition of more reactants or the use of a catalyst were common incorrect suggestions. A small minority of candidates were confused by the question and stated that the atom economy was already 100% which may demonstrate that they had learnt the formula for atom economy but not the concept.

(c) Given that the reaction is an equilibrium, suggest **two** ways in which the atom economy of this process could be maximised without changing the temperature or pressure.

(2)

- Remove product continuously
- Have a high concentration of reactants.



ResultsPlus
Examiner Comments

Atom economy is not improved by addition of more reactants but the removal of the product will score one mark.

Question 21 (a)

This calculation was generally well carried out with many gaining the maximum marks. However, relatively common errors in part (i) were to use 4 significant figures instead of the 3 requested, or to give incorrect units. Transferred errors were allowed in part (ii) where the only mistake seen tended to show issues with the use of powers of ten.

21 This question is about the kinetics of the reaction between bromoethane and aqueous hydroxide ions.

(a) The results of an experiment to find the initial rate of the reaction are shown in the table below.

$[\text{CH}_3\text{CH}_2\text{Br}]$ / mol dm^{-3}	$[\text{OH}^-]$ / mol dm^{-3}	Initial rate / $\text{mol dm}^{-3} \text{ s}^{-1}$
0.100	0.150	1.54×10^{-6}

The rate equation for the reaction is

$$\text{rate} = k[\text{CH}_3\text{CH}_2\text{Br}][\text{OH}^-]$$

(i) Calculate the value of k . Give your answer to three significant figures and include units.

$$\begin{aligned} k &= \frac{\text{rate}}{[\text{CH}_3\text{CH}_2\text{Br}][\text{OH}^-]} && (3) \\ &= \frac{1.54 \times 10^{-6}}{0.10 \times 0.150} && \text{units} = \frac{\text{mol dm}^{-3} \text{ s}^{-1}}{(\text{mol dm}^{-3}) (\text{mol dm}^{-3})} \\ k &= 1.03 \times 10^{-4} \text{ mol}^{-1} \text{ dm}^3 \text{ s}^{-1} \end{aligned}$$

(ii) Calculate the initial rate if the concentrations of both reactants were changed to $0.020 \text{ mol dm}^{-3}$.

$$\begin{aligned} \text{rate} &= k [\text{CH}_3\text{CH}_2\text{Br}] [\text{OH}^-] && (1) \\ &= (1.03 \times 10^{-4}) \times 0.02 \times 0.02 \\ \text{rate} &= 4.12 \times 10^{-8} \text{ mol dm}^{-3} \text{ s}^{-1} \end{aligned}$$



ResultsPlus
Examiner Comments

An example of a good answer, clearly laid out.

Question 21 (b) (i)

The occasional 'first order' was seen but most candidates knew that the overall reaction order was second.

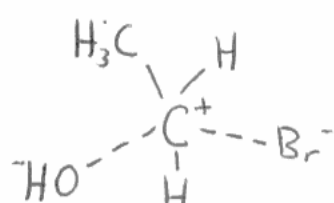
Question 21 (b) (ii)

Fully correct transition states were in the minority. Omission of the overall negative charge was fairly common and the orientation of the in-coming -OH group and out-going -Br atom was often incorrect. A significant number gave the reaction mechanism rather than the requested transition state.

(b) (i) State the order of the reaction. (1)

2nd order

(ii) The mechanism for this reaction can be inferred from the rate equation. Draw the transition state formed in the reaction between bromoethane and hydroxide ions. (2)



ResultsPlus
Examiner Comments

The charges given in this response illustrate some confusion between the different mechanisms for halogenoalkanes. The central carbon does not become positively charged as shown in S_N2 reactions.

Question 21 (c) (i)

Although 3×10^{-3} was acceptable, candidates should be guided by the number of significant figures already used in the table and have given 3.00×10^{-3} . However, the majority of candidates did give the figures correctly.

Question 21 (c) (ii)

This question illustrates the need for candidates to have more practice with drawing graphs. It was very common to see a poor choice of scale, particularly for the y axis, and so less than half of the graph paper was used. The attempts at calculating E_A were better but frequent errors were the inclusion of K^{-1} in the units and/or a negative sign. The omission of 10^{-3} from the graph also caused some candidates problems.

Temperature (T) / K	1/Temperature (1/T) / K ⁻¹	Rate constant, k	ln k
293	3.41×10^{-3}	5.83×10^{-5}	-9.75
303	3.30×10^{-3}	1.67×10^{-4}	-8.70
313	3.19×10^{-3}	5.26×10^{-4}	-7.55
323	3.10×10^{-3}	1.36×10^{-3}	-6.60
333	3.00×10^{-3}	3.77×10^{-3}	-5.58

(i) Complete the missing values in the table.

(2)

(ii) Plot a graph of $\ln k$ against $1/T$. Calculate the gradient of your graph and use this to calculate the activation energy, E_A . The Arrhenius equation can be expressed as

$$\ln k = \frac{-E_A}{R} \times \left(\frac{1}{T} \right) + \text{a constant}$$

[Gas constant, $R = 8.31 \text{ J K}^{-1} \text{ mol}^{-1}$]

~~gradient = $\frac{3.15 \times 10^{-4}}{-3.15} = -0.000095$~~ $\text{grad} = \frac{-3.15}{3 \times 10^{-4}} = -10500$ (5)

$$\Rightarrow y = mx + c$$

$$\text{gradient} = m$$

$$x = \frac{1}{T}$$

$$\therefore \text{gradient} = \frac{-E_A}{R}$$

$$\rightarrow -10500 \times 8.31 = -E_A$$

$$= -87255$$

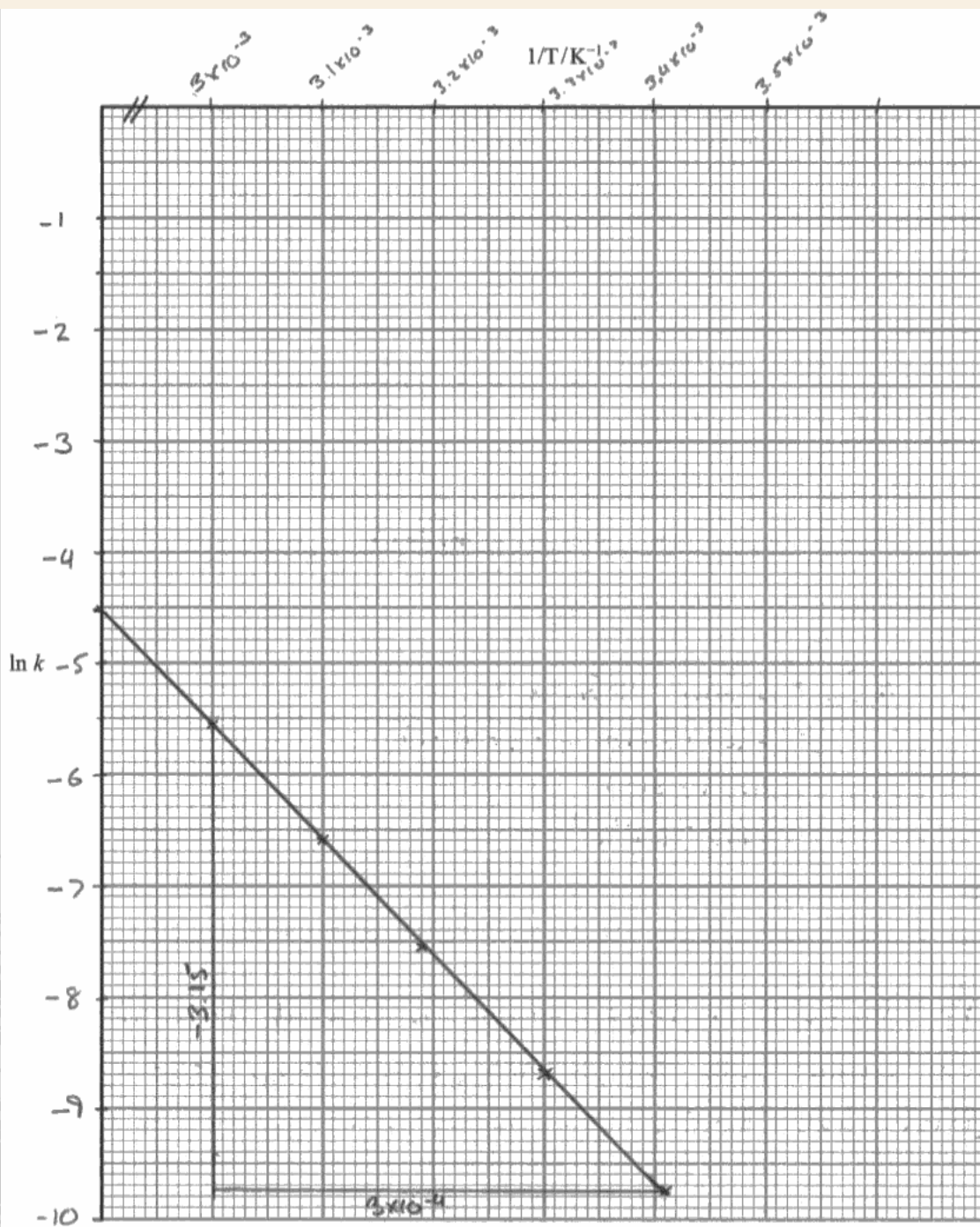
~~$$\therefore 0.000095 = \frac{-E_A}{8.31}$$~~

$$\therefore -E_A = -87255$$

~~$$\therefore -E_A = 0.000095 \times 8.31$$~~
~~$$= -7.8945 \times 10^{-4}$$~~

$$E_A = 87255 \text{ J K}^{-1} \text{ mol}^{-1}$$

$$E_A = 87.255 \text{ kJ K}^{-1} \text{ mol}^{-1}$$



ResultsPlus
Examiner Comments

An example of the wrong use of units in the answer and the poor choice of scale, both of which resulted in the loss of a mark.

Question 22 (a) (i)

Excellent use of the data booklet was seen throughout the paper as evidenced in the responses to this question.

Question 22 (a) (ii-v)

Parts (ii) to (v) again serve as a reminder to candidates to carefully read the question and to answer exactly as they are requested. In part (ii) a sign is clearly asked for and while the vast majority did give the correct sign there were a significant minority that omitted one. In part (iv) a sign and units are requested and a similar type of candidate response to part (ii) was seen.

However, this was a high-scoring question with many candidates achieving high marks. The most common other errors were the omission of gas in part (ii) and the failure to use zero for the total entropy change in the calculation in part (v).

Hydrocarbon	$S^\ominus / \text{J mol}^{-1} \text{K}^{-1}$
$\text{C}_4\text{H}_{10}(\text{g})$	+310.1
$\text{C}_3\text{H}_6(\text{g})$	+266.9
$\text{CH}_4(\text{g})$	+186.2

- (ii) Calculate the standard entropy change of the system, $\Delta S^\ominus_{\text{system}}$, for this reaction. Include a sign in your answer.

$$\begin{aligned}\Delta S_{\text{system}} &= \text{products} - \text{reactants} \\ &= (186.2 + 266.9) - (+310.1) \\ &= 453.1 - 310.1 \\ &= \underline{\underline{+143 \text{ J mol}^{-1} \text{K}^{-1}}}\end{aligned}$$

- (iii) Was the sign for your answer as you expected? Fully justify your answer.

Yes because more molecules of gas have been produced which can have more arrangements and thus more disorder.

(iv) Calculate the entropy change of the surroundings, $\Delta S_{\text{surroundings}}$, at 700 K.

Include a sign and units in your answer.

Use this value and your answer to (ii) to explain why butane cracks into propene and methane at this temperature.

(3)

$$\Delta S_{\text{surr}} = \frac{-\Delta H}{T} = -\frac{(+71.93 \times 1000)}{700} = -102.7 \text{ J mol}^{-1} \text{ K}^{-1}$$

$\Delta S_{\text{total}} = 143 + (-102.7) = +40.3$. The positive ΔS_{total} shows means the reaction is spontaneous at this temperature

(v) Calculate the minimum temperature needed for this reaction to be thermodynamically feasible.

(3)

ΔS_{total} must be ~~>~~ $> -200 \text{ J mol}^{-1} \text{ K}^{-1}$

$$\begin{aligned} \text{so } -200 &< 143 + \frac{-(71.9 \times 1000)}{T} \\ -343 &< \frac{-71900}{T} \\ 1 &> \frac{71900}{343} \\ &\rightarrow \frac{209.6}{1} \\ &\rightarrow \underline{\underline{210 \text{ K}}} \text{ so min temp is } \underline{\underline{\approx 210 \text{ K}}} \end{aligned}$$

$\frac{-200 = 143 + \frac{-71900}{T}}{-343 = \frac{-71900}{T}}$



ResultsPlus
Examiner Comments

For some reason the value for the total entropy change used in the calculation in part (v) was -200. Clearly this is incorrect but there were marks for the method of the calculation which thereafter was done correctly.

Question 22 (b)

A very high scoring question with the vast majority scoring all 3 marks. If there was an issue, it was that the state of the catalyst was compared to the reactants **and** the products instead of simply the reactants.

(b) The aluminium oxide behaves as a heterogeneous catalyst. Explain both what is meant by the term **heterogeneous** and how, in terms of activation energy, the catalyst is able to speed up the reaction.

(3)

4 different states, gas; liquid; solid and aqueous solution
If you use a catalyst that is in a different state to that of a reactants it is called heterogeneous. ~~are~~ Because they are different state.
Using a catalyst in a reaction lowers activation energy, because it uses less energy to get it to start the reaction without being used up.



ResultsPlus
Examiner Comments

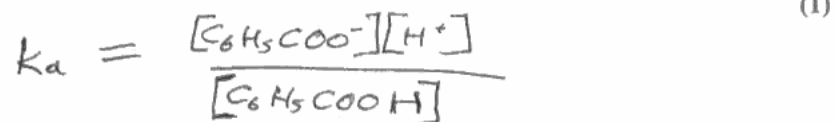
No credit was given for the statement that a catalyst is not used up but a mark was given for the lowering of the activation energy.

Question 23 (a) (i)

Candidates of all abilities were able to score on this question. It was only 'careless' slips such as the omission of a charge that meant the mark was lost

23 The bubble bath 'Colour Change Matey' has amongst its ingredients the weak acid benzoic acid, as well as the indicator bromocresol green. When it is added to bath water, its colour changes from yellow to blue.

(a) (i) Write the K_a expression for the dissociation of benzoic acid, C_6H_5COOH .



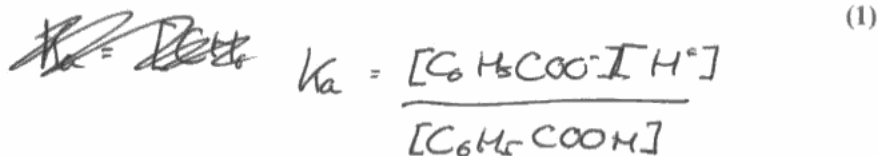
ResultsPlus
Examiner Comments

An example of a correct response.

Question 23 (a) (ii)

Most candidates were correctly able to calculate pH and to score 2 marks. The occasional arithmetical error was seen.

(a) (i) Write the K_a expression for the dissociation of benzoic acid, C_6H_5COOH .



(ii) Use the data on page 18 of the data booklet to calculate the pH of a solution of benzoic acid, C_6H_5COOH , of concentration $0.0025 \text{ mol dm}^{-3}$.

$[C_6H_5COO^-] = [H^+]$ (2)

$$6.3 \times 10^{-5} = \frac{[H^+]^2}{[C_6H_5COOH]} = \frac{[H^+]^2}{0.0025}$$

$$[H^+]^2 = 1.575 \times 10^{-7} \rightarrow \sqrt{1.575 \times 10^{-7}} = 3.968 \times 10^{-4} \dots$$

$$\text{pH} = -\log [H^+] = \underline{\underline{3.40}}$$



ResultsPlus
Examiner Comments

An example of a correct answer.

Question 23 (b)

Only the more able candidates could correctly describe why the colour changes occurred. Most responses did include the requested pH range for the indicator and then state the addition of bath water diluted the acid so that the concentration of the H^+ ions decreased. A logical stepwise approach to this type of question is always recommended. The colour is yellow to begin with because of the low pH from part a(ii) which is below the pH range of the indicator. Then the colour changes to blue when the pH goes above the range (5.4). References to green were not given credit because the colour changes in the question were from yellow to blue.

(ii) Use the data on page 18 of the data booklet to calculate the pH of a solution of benzoic acid, C_6H_5COOH , of concentration $0.0025 \text{ mol dm}^{-3}$.

(2)

$$6.3 \times 10^{-5} = \frac{[H^+]^2}{0.0025}$$

$$-\log [H^+] = \text{pH}$$

$$6.3 \times 10^{-5} \times 0.0025 = [H^+]^2$$

$$\text{pH} = 3.4$$

$$1.575 \times 10^{-7} = [H^+]^2$$

$$[H^+] = 3.97 \times 10^{-4}$$

*(b) Use the data on page 19 of the data booklet, and your answer to (a)(ii), to suggest why the bubble bath changes colour when it is diluted by being added to the bath water.

(4)

changes colour because the range of the indicator used is between 3.8 - 5.4 this range covers the ~~neutral point~~ pH range of the equivalence point of this reaction and therefore changes from yellow to blue when water is added and the benzoic acid is neutralised.



ResultsPlus
Examiner Comments

A reminder to make sure that a response includes the 'easy' mark. Here the question requests the data from page 19 of the booklet and this candidate has stated this first to be sure of that mark. There is nothing else worthy of credit here.

Page Summary

Questions 21a(i), 22a(iii) and (iv) clearly asked for either signs, a specific number of significant figures and/or units. Candidates need to always be reminded to answer exactly as requested. Practice at graph drawing would be useful to many, with particular emphasis on the appropriate choice of scale. When reasons are requested then the responses need to be clear and to refer to different reasons if full marks are to be awarded. Additional support to candidates on the concepts behind nmr and why acyl chlorides have greater reactivity than carboxylic acids would better help candidates.

Grade Boundaries

Grade boundaries for this, and all other papers, can be found on the website on this link:

<http://www.edexcel.com/iwantto/Pages/grade-boundaries.aspx>

